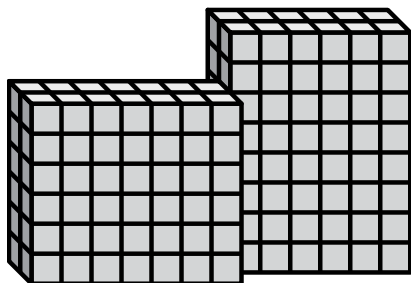




Find the total volume of each figure. Measurement is in cm (not to scale).

Answers

1)



1. _____

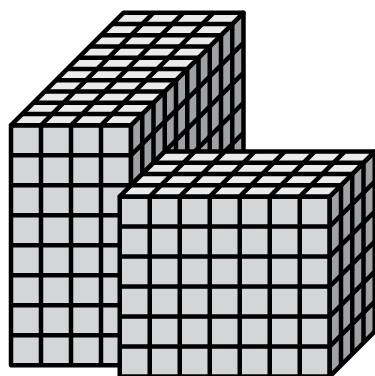
2. _____

3. _____

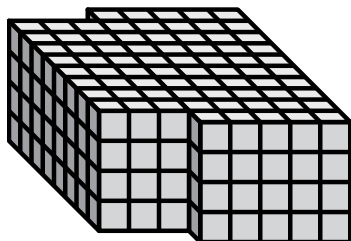
4. _____

5. _____


2)



3)



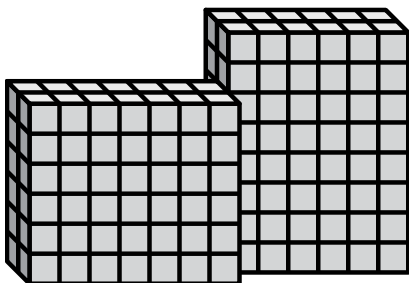
4)





Find the total volume of each figure. Measurement is in cm (not to scale).

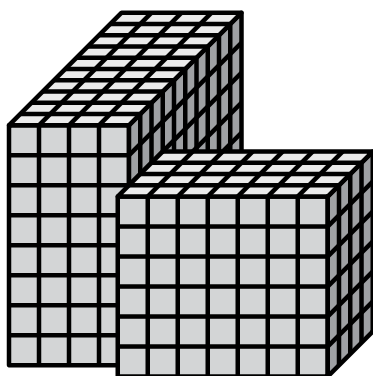
1)



$$6 \times 8 \times 2 = 96$$

$$7 \times 6 \times 2 = 84$$

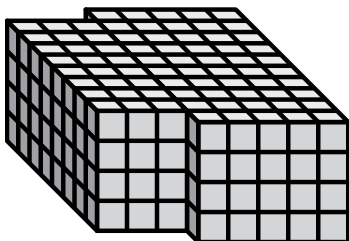
2)



$$4 \times 8 \times 10 = 320$$

$$7 \times 6 \times 4 = 168$$


3)



$$5 \times 4 \times 10 = 200$$

$$3 \times 4 \times 8 = 96$$

4)



$$7 \times 3 \times 4 = 84$$

$$10 \times 2 \times 3 = 60$$

Answers

1. 180 cm³

2. 488 cm³

3. 296 cm³

4. 144 cm³

5. 152 cm³